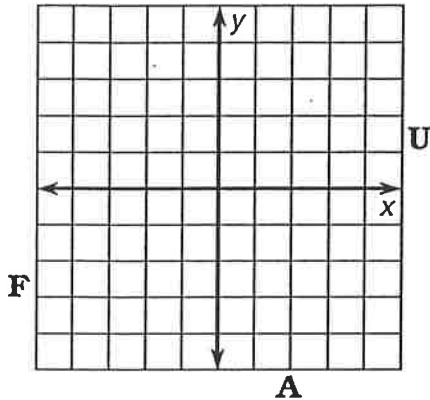


What Happened to the Little Boy Who Swallowed a Silver Dollar?

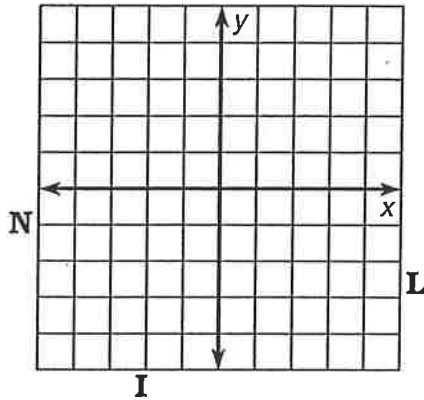


Use the slope and y-intercept to graph each equation. The graph, if extended, will cross a letter outside the grid. Look for this letter in the string of letters at the bottom of the page and cross it out each time it appears. When you finish, write the remaining letters in the rectangle at the bottom of the page.

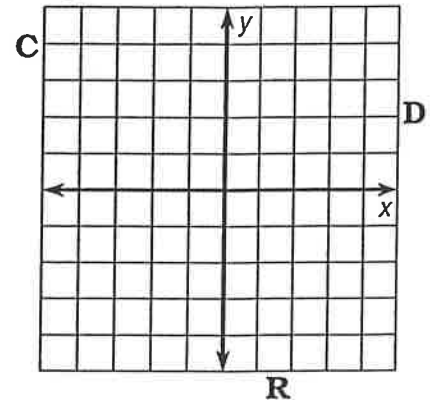
1 $y = \frac{2}{3}x + 1$



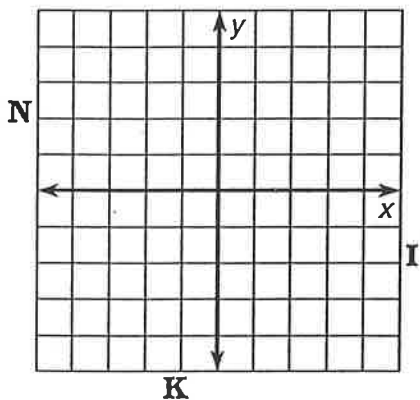
2 $y = -\frac{2}{3}x + 1$



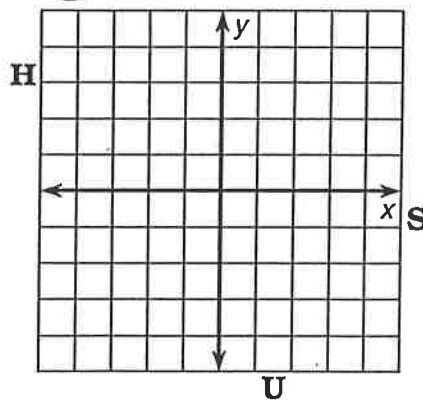
3 $y = \frac{3}{4}x - 2$



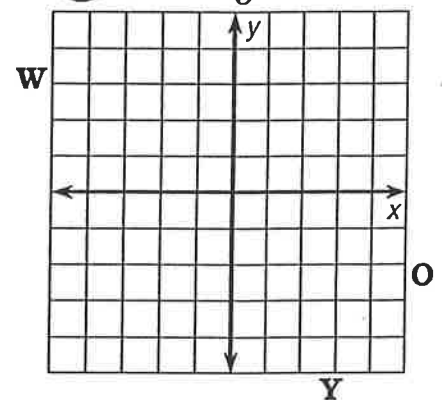
4 $y = 2x - 3$



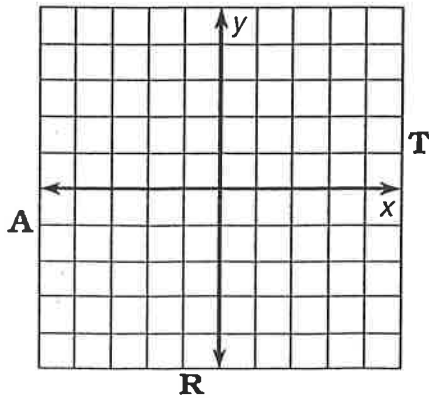
5 $y = -3x - 1$



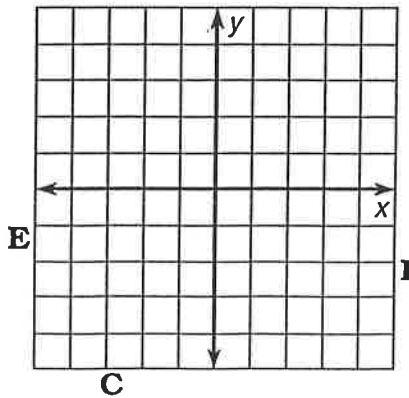
6 $y = -\frac{1}{5}x + 2$



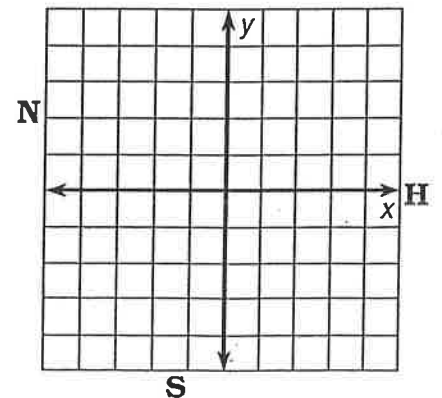
7 $y = \frac{7}{4}x - 4$



8 $y = -x + 3$



9 $y = 4x$



R I N D S O C K W H I F R A N U L I G E Y W E D S T
 answer to puzzle:

What Helps Chicks Get Out of Their Shells?

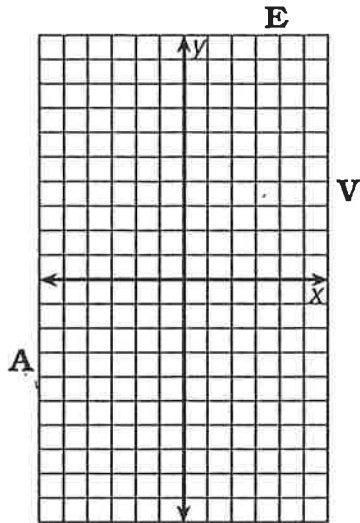
Complete the table of solutions for each equation. Then graph the solutions and draw a line through them. The line, if extended, will cross a letter outside the grid. Write this letter in each box containing the exercise number.

4	3	1	1	6	6	5	2	4
---	---	---	---	---	---	---	---	---

1

$$y = 3x - 1$$

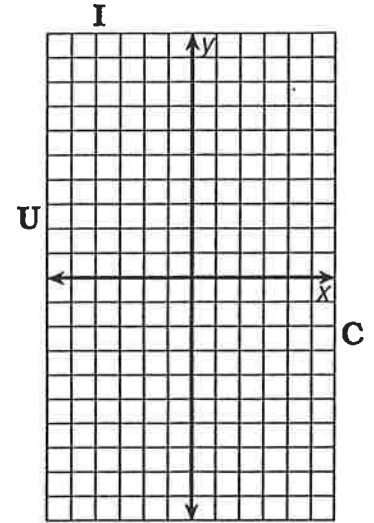
x	y
3	
2	
-2	
0	



2

$$y = -2x + 3$$

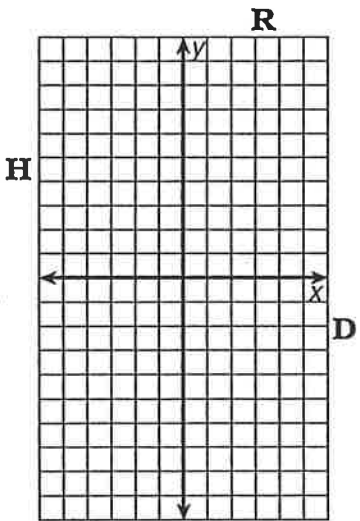
x	y
5	
-3	
2	
0	



3

$$y = -x - 2$$

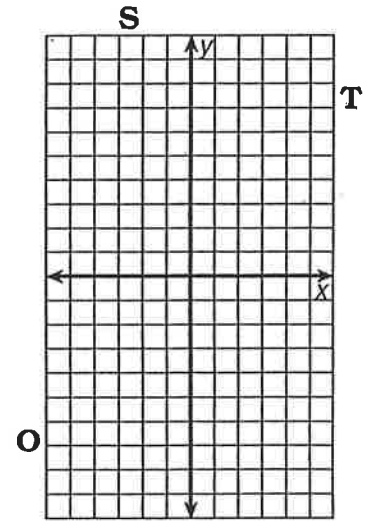
x	y
6	
-5	
-2	
0	



4

$$y = \frac{1}{2}x + 4$$

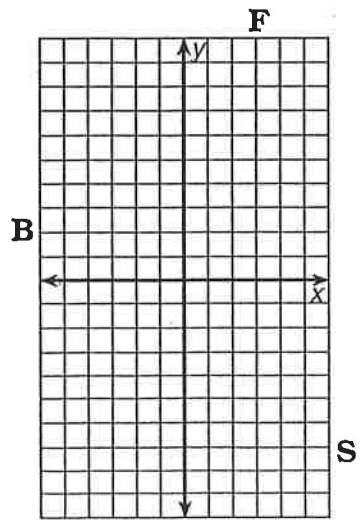
x	y
4	
6	
-2	
0	



5

$$y = 7 - 2x$$

x	y
2	
-1	
5	
0	



6

$$y = -\frac{2}{3}x + 1$$

x	y
6	
-6	
3	
0	

